



À mon tour

3



Compte les abeilles  et complète.

Chaque groupe a le même nombre d'abeilles .



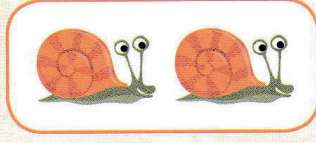
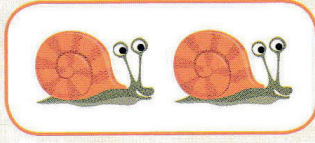

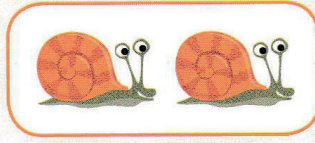
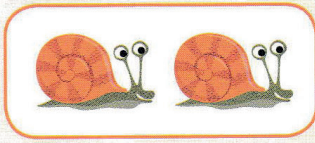
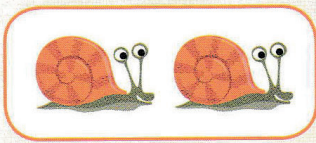
$$8 + 8 = \underline{16} \quad \underline{2} \text{ groupes de } 8 = \underline{16}$$



4



Compte les escargots  et complète.




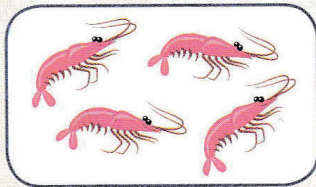



$$2 + 2 + 2 + 2 + 2 + 2 = \underline{12} \quad \underline{6} \text{ groupes de } 2 = \underline{12}$$

5



Compte les crevettes  et complète.



$$\underline{4} + \underline{4} + \underline{4} + \underline{4} + \underline{4} = \underline{20} \quad \underline{5} \text{ groupes de } 4 = \underline{20}$$